



NAME _____

DATE _____


CLASS _____

SCORE _____

Greater Than > Less Than < Equal To =




2




9

7




4

5




5

6




8

4



1

3




3

NAME _____











DATE _____

CLASS _____

SCORE _____



GREATER THAN, LESS THAN, EQUAL TO



NAME _____

DATE _____

CLASS _____

SCORE _____

Greater Than, Less Than, Equal

To

$3 \square 5$

$8 \square 8$

$6 \square 1$

$7 \square 9$

$5 \square 2$

$4 \square 1$

$9 \square 10$

$3 \square 6$

$7 \square 3$

$5 \square 8$

$1 \square 1$

$6 \square 2$

NAME _____

DATE _____

CLASS _____

SCORE _____

Greater Than, Less Than, Equal To

